

Year 1 Spring 2 Maths Activity Mat 3


Section 1

Add the coins together.



Section 2

Draw 8 o'clock on the clock face.



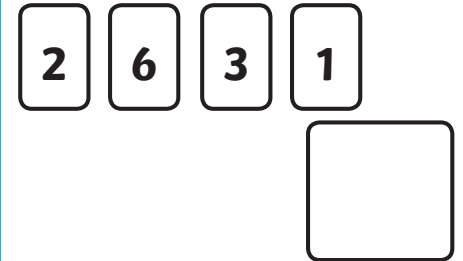
Section 3

Fill in the missing numbers.

4, 5, , 7, ,


Section 4

Use two cards to make a number greater than 40.




Section 5

12 is six more than...



Section 6

Put a ring around the triangle.



Section 7

$$6 + \square = 11$$

Section 8

Circle the shortest time.

one minute one second
one year one week

Year 1 Spring 2 Maths Activity Mat 3 Answers


Section 1

Add the coins together.

8p

Section 2

Draw 8 o'clock on the clock face.



Section 3

Fill in the missing numbers.

4, 5, , 7, ,

Section 4

Use two cards to make a number greater than 40.

61 or 62 or 63


Section 5

12 is six more than...

6

Section 6

Put a ring around the triangle.



Section 7

$$6 + \text{} = 11$$

Section 8

Circle the shortest time.

one minute one second

one year one week

Year 1 Spring 2 Maths Activity Mat 3


Section 1

What is half the value of the coins?



Section 2

Draw 11 o'clock on the clock face.



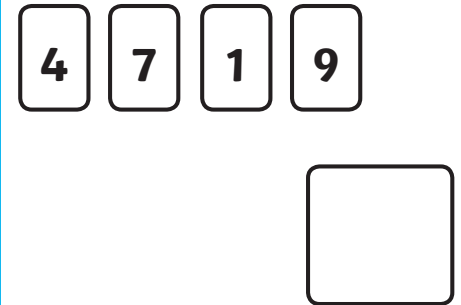
Section 3

Fill in the missing numbers.

4, , 8, 10, ,


Section 4

Use two cards to make a number less than 20.




Section 5

20 is 12 more than...



Section 6

Put a ring around the four-sided shapes.



Section 7

$$12 + \square = 19$$

Section 8

Circle the longest time.

one minute 30 seconds
one hour one day

Year 1 Spring 2 Maths Activity Mat 3 Answers


Section 1

What is half the value of the coins?

5p

Section 2

Draw 11 o'clock on the clock face.



Section 3

Fill in the missing numbers.

4, , 8, 10, ,

Section 4

Use two cards to make a number less than 20.

14 or 17 or 19

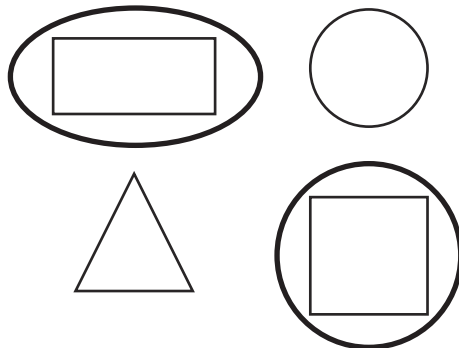
Section 5

20 is 12 more than...

8

Section 6

Put a ring around the four-sided shapes.



Section 7

$$12 + \text{} = 19$$

Section 8

Circle the longest time.

one minute 30 seconds

one hour

Year 1 Spring 2 Maths Activity Mat 3


Section 1

What is half the value of the coins?



Section 2

Draw half past seven on the clock face.



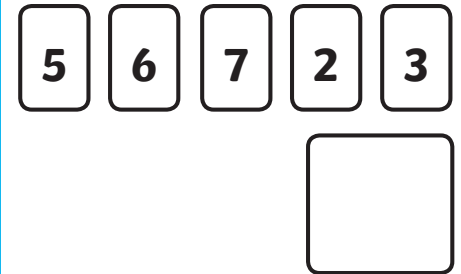
Section 3

Fill in the missing numbers.

$$45, 40, \square, \square, 25, \square$$


Section 4

Use two cards to make the number closest to 70.




Section 5

31 is 17 more than...



Section 6

Put a ring around the quadrilaterals.



Section 7

$$26 - \square = 12$$

Section 8

Circle the shortest time.

100 minutes 75 seconds
four days one week

Year 1 Spring 2 Maths Activity Mat 3 Answers


Section 1

What is half the value of the coins?

9p

Section 2

Draw half past seven on the clock face.



Section 3

Fill in the missing numbers.

45, 40, , , 25,

Section 4

Use two cards to make the number closest to 70.

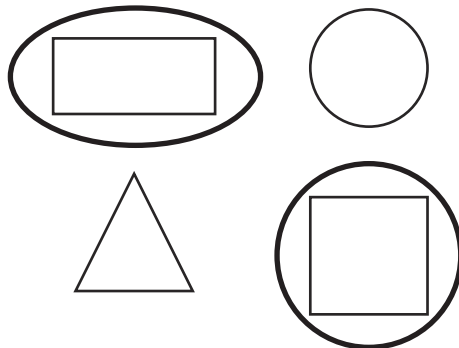
Section 5

31 is 17 more than...

14

Section 6

Put a ring around the quadrilaterals.



Section 7

$$26 - \text{input value } 14 = 12$$

Section 8

Circle the shortest time.

100 minutes
four days one week